



KEC

K Education Centre



© K Education Centre

KS1 Year 2 Mathematics

Time Problems -1

Assignment Questions

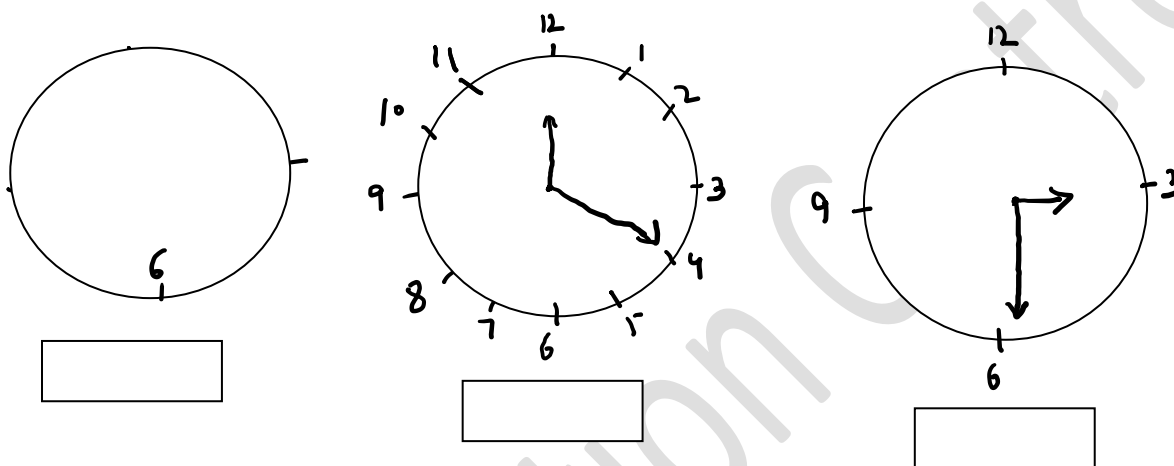
©KEducationCentre
Year 2024

Time Part 1:

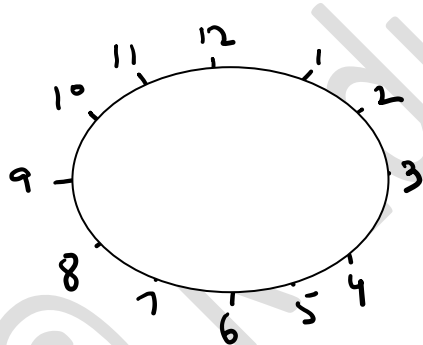
Q1: How many hours are in a day ?

Q2: How many minutes are in an hour?

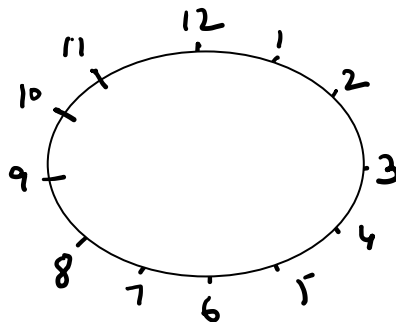
Q3: Write down the time as shown in the clocks in the boxes :



Q4: Draw the hand to show time in the clocks below:



Ten Past Six



Twenty to Two

Q3: What time are shown in following digital clocks

a)

b)

c)

Arithmetic

Solve:

$$9 \times 4 =$$

$$28 \div \square = 7$$

$$\frac{1}{3} \text{ of } \pounds 24$$

$$9 \times 2 =$$

$$48 \div \square = 6$$

$$9 \times 5 =$$

$$\frac{1}{3} \text{ of } \pounds 15$$

$$9 \times 7 =$$

$$36 \div \square = 4$$

$$\frac{3}{4} \text{ of } \pounds 32$$

$$8 \times 6 =$$

$$12 \div \square = 2$$

$$\frac{1}{2} \text{ of } 60 \text{ m}$$

$$\frac{1}{2} \text{ of } \pounds 16$$