

K Education Centre

KS3 Year 7 Mathematics

Angles -2

Assignment Questions

©KEducationCentre
Year 2022

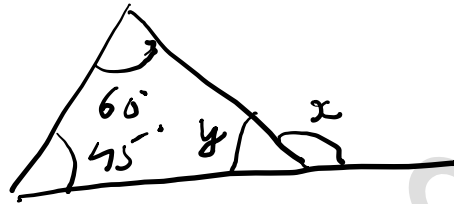
Angles -2

Find the missing angles.

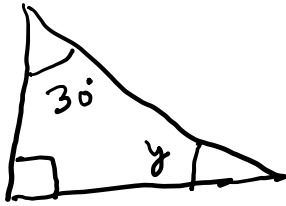
a)



b)

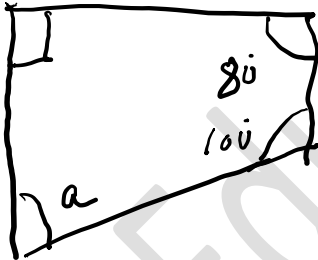


c)



Find the missing values .

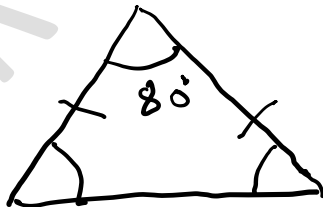
a)



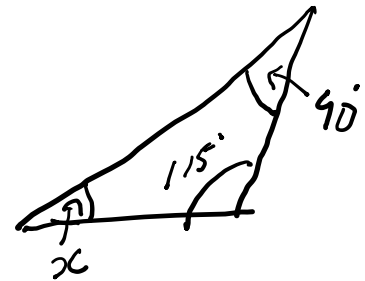
b)



c)



d)



e)

