



KEC

K Education Centre



KS3 Year 7 Mathematics

Negative numbers and Rounding

Assignment Questions

©KEducationCentre
Year 2022

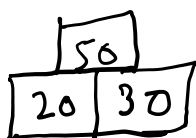
Negative Numbers and Rounding:

Q: Solve the following:

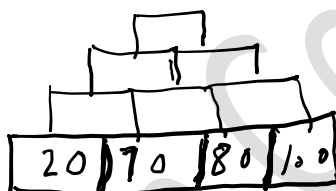
a) $-4 + 11$ b) $-6 - 39$ c) $-5 + -6$

d) $-9 - -10$

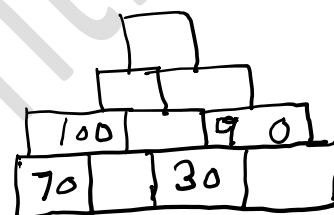
Q: Complete the following as show in in the example below:



a)



b)



Q: Round the following to nearest tens :

a) 85 b) 92 c) 96 d) 13

Q: Round the following to nearest hundreds:

a) 529 b) 460 c) 650 d) 980

Q: Round the following to nearest thousands :

a) 1259 b) 3262 c) 4929 d) 5623

Q: Complete the table below :

	Nearest 10's	Nearest 100's	Nearest 1000's
1269			
9423			
7288			
7942			