



KEC

# K Education Centre



## KS3 Year 8 Mathematics

Circles part 2

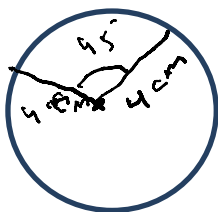
Assignment Questions

©KEducationCentre  
Year 2022

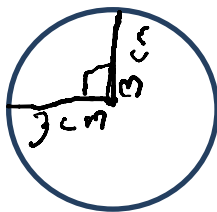
## Circles Part2

Q1: Find the area of sector for following.

a)



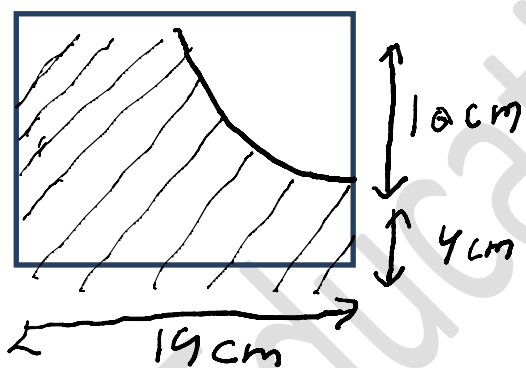
b)



Q2 : The wheel is on a bicycle have radius of 40 cm. How many complete turn does each wheel rotate when bicycle travels 50 m ?

Q3: Find the area of the shaded region:

a)



b)

