



KEC

# K Education Centre



© K Education Centre

## KS3 Year 8 Mathematics

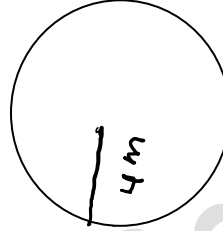
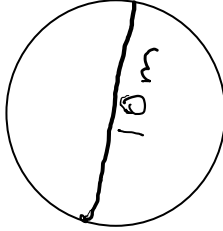
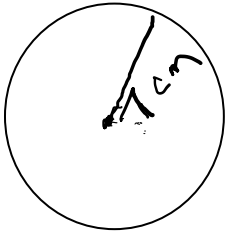
Area part -2 ( Circles)

Assignment Questions

©KEducationCentre  
Year 2022

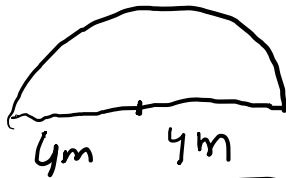
## Circles

Q1: Find the area and circumference of the following circles.



Q2: For each of the semicircle below , find the area and perimeter.

a)



b)



Q3: A man walks around the outside of a circular flower bed with a radius of 10m . Work out the circumference of the flower bed about one decimal place.

Q4: Find the area of the following:

